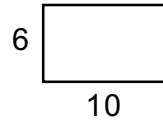
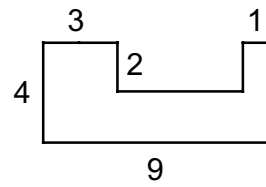


Perimeter =
Area =



Area =



$$5.23 \times 10^3 =$$

$$7.4 \times 10^{-3} =$$

Write in scientific notation:
839, 400 =

$$\frac{5}{8} = \text{(decimal)}$$

$$(3^4)^2 =$$

$$5^3 \times 5^4 =$$

$$5^2 \times 3^2 =$$

$$X = 4; X^{-3} =$$

$$8^5 \times 8^{-3} =$$

$$\frac{12^6}{12^2} =$$

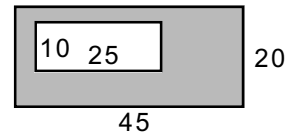
$$\frac{13^{-3}}{13^{-5}} =$$

XXXXYYYYY =

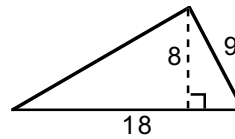
$$(5A B^3) (4A^5 B^3) =$$

The reciprocal of $\frac{A^2 B}{C} =$

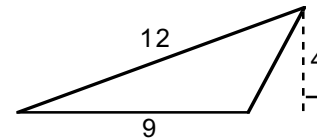
Area of the shaded part =



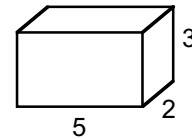
Area =



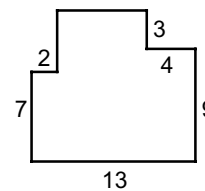
Area =



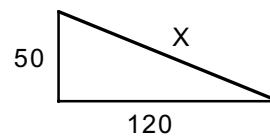
Volume =
Total surface area =



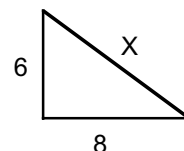
Area =



X =



X =



$$\sqrt{49A^{10}} =$$